

Adı :
Soyadı:

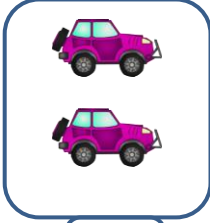
1. Sınıf
Matematik

Toplama İşlemi
Alıştırmalar-1

Toplayıp sonucunu yazınız.



+



=




1


2

3


$$1 + 2 = 3$$



+



=



.....

.....

.....


$$\square + \square = \square$$



+



=



.....

.....

.....


$$\square + \square = \square$$



+



=



.....

.....

.....

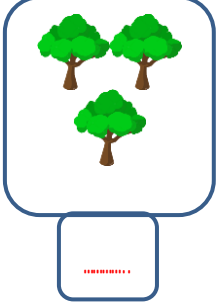
$$\square + \square = \square$$

Adı :
Soyadı:

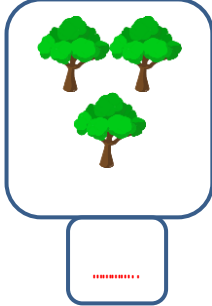
1. Sınıf
Matematik

Toplama İşlemi
Alıştırmalar-1

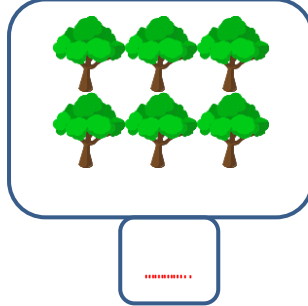
Toplayıp sonucunu yazınız.




+




=




<input type="text"/>	+	<input type="text"/>	=	<input type="text"/>
----------------------	---	----------------------	---	----------------------




+




=



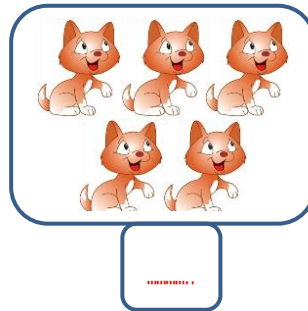
<input type="text"/>	+	<input type="text"/>	=	<input type="text"/>
----------------------	---	----------------------	---	----------------------




+




=




<input type="text"/>	+	<input type="text"/>	=	<input type="text"/>
----------------------	---	----------------------	---	----------------------



+



=



<input type="text"/>	+	<input type="text"/>	=	<input type="text"/>
----------------------	---	----------------------	---	----------------------